

Aşağıda bulunan 8 rakamlarını daire içine alalım. 11 tane 8 rakamı olduğunu unutmayalım.

92538146913463159

1783615489563492

46831486925163618

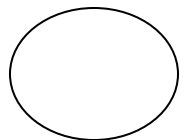
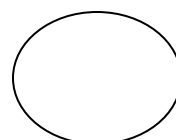
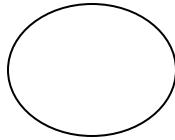
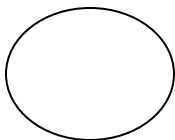









2364789316583749

2742361548956241

69375174291351615

38571917243685271

Hangi kediden kaçar tane var sayıp yazalım. Sayarken üstlerini çizmeyi unutmayalım.



Şekillerin aynılarını boş alanlara çizelim.

